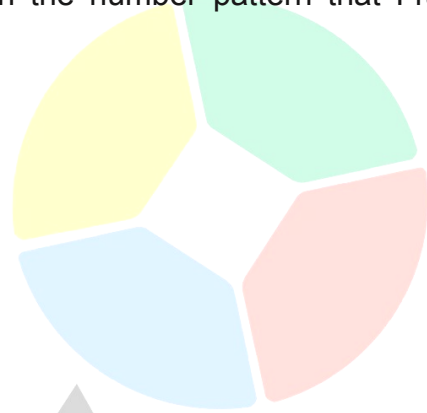


- 1 Franco created a number pattern by skip-counting by 4 starting at 12.

Which of these numbers is **NOT** included in the number pattern that Franco created?

- A 16
- B 18
- C 20
- D 28
- E 36



- 2 Joey went to the candy store and bought two boxes of caramel bars.

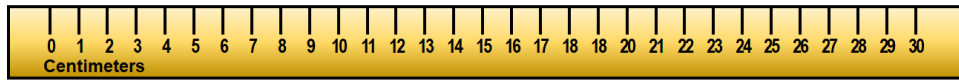
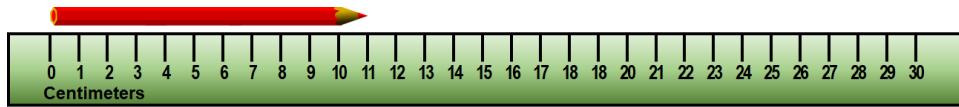
One box contained 24 caramel bars and the other box contained 36 caramel bars.

When Joey got home, he gave 15 of the caramel bars to her sister.

How many caramel bars did he have left?

- A 12 caramel bars
- B 21 caramel bars
- C 45 caramel bars
- D 50 caramel bars
- E 60 caramel bars

- 3 The figures below show the lengths of the red pencil and the blue pencil.



The blue pencil is about how many centimetres longer than the red pencil?

- A 5 centimetres
  - B 8 centimetres
  - C 10 centimetres
  - D 11 centimetres
  - E 16 centimetres
- 4 Ruby watched a movie that was 1 hour 45 minutes long.
- If the movie started at 5:45 PM, what time did the movie end?
- A 6:45 PM
  - B 7:00 PM
  - C 7:15 PM
  - D 7:30 PM
  - E 7:45 PM

5 A rectangular painting has a perimeter of 48 metres.

If the painting is 14 metres long, what is the width of the painting?

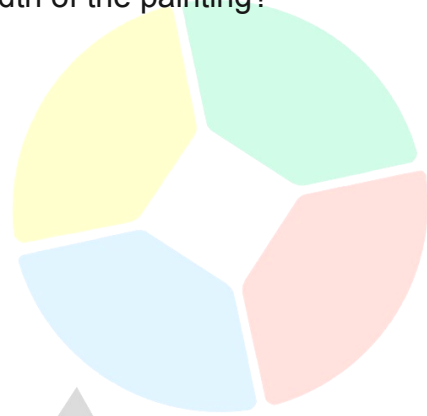
A 10 metres

B 14 metres

C 20 metres

D 28 metres

E 34 metres



Scholarly